

Name: _____

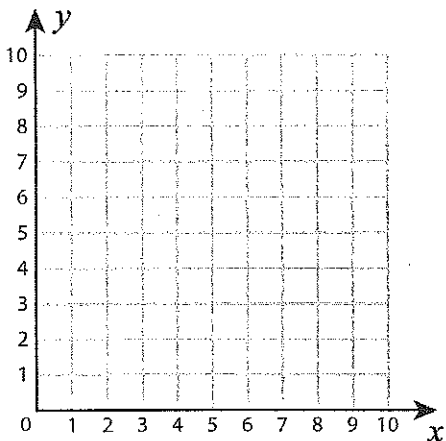
Score: _____

Plotting Points - Shapes

Plot and join the points in the given order. Complete the figure by joining the end points. Identify the shape.

Class example

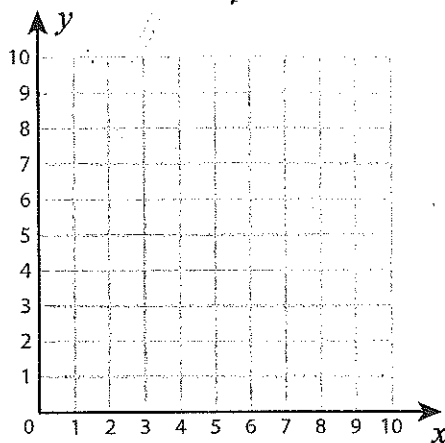
- 1) (2, 8), (3, 9), (5, 9), (6, 8), (5, 7), (3, 7)



Shape: _____

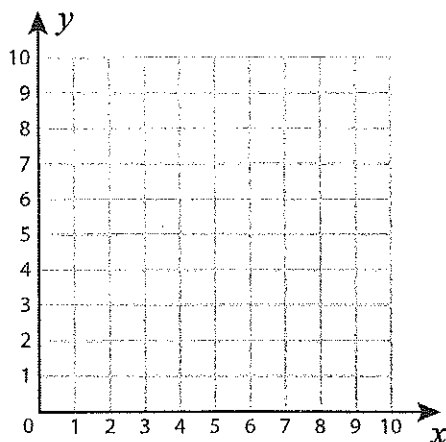
Class example

- 2) (5, 5), (9, 5), (9, 1), (5, 1)



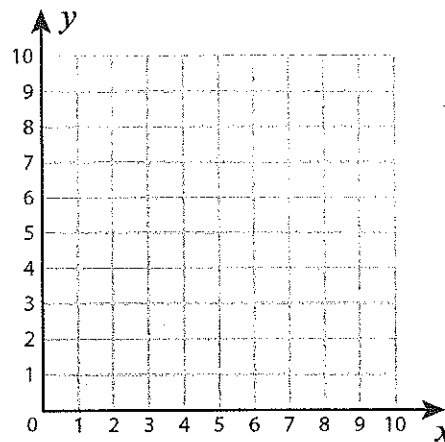
Shape: _____

- 3) (2, 4), (3, 7), (7, 7), (6, 4)



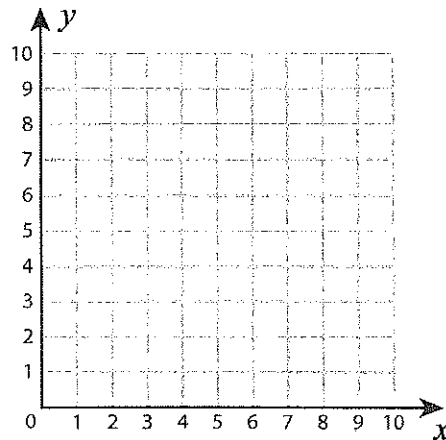
Shape: _____

- 4) (3, 9), (7, 5), (3, 2)



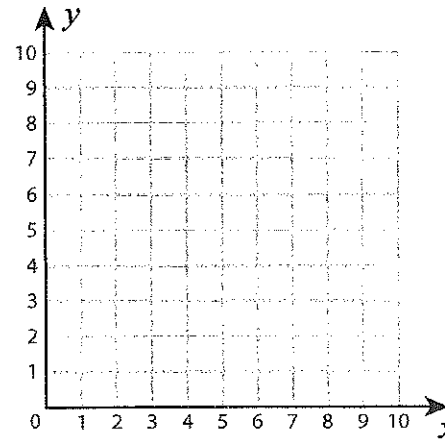
Shape: _____

- 5) (2, 7), (8, 7), (8, 3), (2, 3)



Shape: _____

- 6) (4, 7), (7, 7), (10, 4), (1, 4)



Shape: _____

Mon

Tues

Wed

Thurs